



Dear Parents,

We are in the midst of a global pandemic. Schools are prominent social institutions and if we have to make certain changes in the educational process during these times we will do so.

So let's shift gear from the school being the hub of learning to school home learning.

We at M.S. School is taking an initiative in this regard and will be sharing worksheets, certain activities to be done and their observations being recorded and some reading comprehension.

We shall also be sharing certain links for the students to follow.

The students may use the notebooks that were being used in the previous session to write down the answers.

So parents, let's collaborate and utilise this time to continue with the process of learning.

સુજ્ઞ વાલીશ્રી,

આજે આપણે એક વૈશ્વિક મહામારીમાંથી પસાર થઈ રહ્યા છીએ. શાળાઓ એક મુખ્ય સામાજિક સંસ્થા છે અને આ સમયમાં આપણે આપણી શૈક્ષણિક પ્રણાલીમાં પરિવર્તન લાવવાનું હોય તો આપણે તે ચોક્કસપણે કરીશું.

તો આપણે સૌ સાથે મળીને આપણી આ કેન્દ્રબિંદુ સમાન શાળાનો ઘર સુધીનો અભ્યાસ શરૂ કરીએ.

M.S.સ્કુલે આ પરિસ્થિતિમાં ઘરેથી અભ્યાસ કરાવવાની પહેલ શરૂ કરી છે અને તેમાં પ્રયત્નશીલ થઈને વર્કશીટ, વાંચન, ચોક્કસ પ્રવૃત્તિઓ કરાવશે અને તેનું નિરીક્ષણ પણ નોંધવામાં આવશે. આપણે બધા માટે કેટલીક ચોક્કસ Links પણ વિદ્યાર્થીઓને અનુસરવા આપીશું.

જવાબ લખવા માટે વિદ્યાર્થીઓ અગાઉના સત્રમાં વપરાયેલી નોટબુક્સનો ઉપયોગ કરી શકશે.

તો વાલીશ્રીઓ, આ સર્જનાત્મક પ્રવૃત્તિમાં ચાલો આપણે સૌ સહયોગ કરીએ અને આ સમયમાં અભ્યાસની પ્રવૃત્તિ સતત ચાલતી રહે તે માટે સહયોગી બનીએ.



Q - 1. MCQ.

1. A special sound or visual effect that can be added to objects on slide is
[a]. Transition [b]. customization [c]. Animation
2. The view in which power point displays the presentation by default is.
[a]. Outline view [b]. Slide view [c]. Normal view
3. The view effect that appears while moving from one slide to another is
[a]. Animation [b]. Transition [c]. slide show
4. A presentation program developed by Microsoft is [a]. Power point [b]. Flash [c]. Word
5. The images can be added in a slide through [a]. clipart [b]. themes [c]. Word art

Q - 2. Fill in the blanks.

1. _____ are picture files that can be inserted into a slide.
2. _____ shows you one slide at a time.
3. _____ is a presentation program.
4. The normal view contains three panes _____ and _____.
5. A design theme can be selected using _____ tab.
6. One page of a presentation is called _____.

Q - 3. True or false.

1. You can animate the presentation.
2. A group of pages on any one topic is called as a presentation.
3. A power point presentation is known as a document.
4. You cannot add sound and videos to your presentation.

Q - 4. Short answer question.

1. What is slide ? _____
2. What is slide transition ? _____
3. What is animation ? _____
4. How many presentation views are available in power point _____
5. Use of clipart in power point presentation. _____

Q - 5. write a definition of following.

1. Title Bar = _____
2. Status Bar = _____
3. Slide pane = _____
4. Notes pane = _____
5. Text placeholder = _____

Q - 6. Write a steps to Run a Slide show in Power point Presentation.

**PART - A Reading skills****Q-1. Read the following and answer the questions given below.**

Kalpna Chawla said that she never dreamt, as a child in karnal that she would cross the frontiers of space . It was enough that her parents allowed her to attend engineering college after she graduated from Tagore School . After a Bachelor of science degree in Aeronautical engineering, she went to the united states of America for a Master's degree. She later earned her PHD in Aerospace engineering . Kalpna Chawla was the first Indian -American woman astronaut to blast off from the launch pad at cape Canaveral , florida and participant in a successful mission in space. Her family from India cheered along with the staff at the kennedy space center as they watched the Columbia lift off. Kalpna was born in Karnal , Haryana but was a naturalized US citizen, married to flight instructor Jean- Pierre Harrison. Besides being an astronaut . She was licensed to fly single and multiengine land airplanes , single - engine seaplanes and gliders.

1. Who is the first woman space traveler of India ? _____

2. where did she do graduation in Engineering ? _____

3. what is the name of Kalpna's husband ? _____

4. where was Kalpna Chawla born ? _____

5. Besides an astronaut , what she was licensed to fly ? _____

PART - B Grammar**Q-1. fill in the blanks using a , an , the**

Radhika _____ prettiest girl in our class, would certainly get Sita's role. since I has _____ shrill voice, I could not hope to be Rama. I thought I would be chosen to play _____ role of Laxmana . I went around for _____ few days, imagining myself on stage with _____ bow and arrow . This was such _____ encouraging thought for _____ amateur actor like me.

Q-2. fill in the blanks with the words given in the box.

[smiled , giggled , chuckled , matter of concern , drifted over]

1. The fragrance of the perfume _____ from the next room.

2. Deforestation is a _____ for the entire humanity.

3. my mother _____ at me when she saw me cleaning my room.

4. The monkey _____ quietly to himself when he saw the banana seller leave the bananas under the tree.

5. The girls _____ shyly when they saw their favorite cricketer smiling at them.

Q-3. Arrange words to make meaningful sentences.

1. make don't noise I while away am. _____

2. ouch book you dropped my foot the on. _____

3. planning Rohit is to do what tomorrow. _____

4. will I visit aunt my today. _____

Q-4. Read each sentence and state whether it is declarative , interrogative , imperative , or exclamatory.

1. my uncle is arriving soon from Shimla. _____

2. may, I borrow this pen ? _____



3. Don't open the window. _____

4. Will I visit aunt my today. _____

Q-5. circle the subjects and underline the predicate in the following sentences.

1. The Red Team won the match.
2. I loved the puppet show.
3. the tiger is roaring in its cage.
4. The vegetable market is nearby.

Q-6. fill in the blanks with correct form of verbs given in the brackets.

1. The dancers _____ (has) performed very well.
2. Our class _____ (be) well it.
3. Mohan and Ram _____ (be) good singers.
4. the umpire _____ (has) not given the decision.

Q-7. fill in the blanks with the correct collective and common nouns given in the box.

[Bunch , book, clump , lamb , band , sparrow]

1. I can't find the _____ of keys my mother had left with me.
2. A _____ of musicians played happily in the fair.
3. Mary had a little _____ with fleece as white as snow.
4. sparrow is the name of a _____.
5. The _____ of bushes near the pond bears beautiful flowers in spring.
6. I love to read the _____ Oliver twist written by Charles Dickens.

Q-8. write the comparatives and superlatives of the following Adjectives.

	Comparative	Superlative
1. Long	_____ (than)	(the) _____
2. happy	_____ (than)	(the) _____
3. clever	_____ (than)	(the) _____
4. sweet	_____ (than)	(the) _____
5. good	_____ (than)	(the) _____
6. Beautiful	_____ (than)	(the) _____

Q-9. circle the determiners and identify their kinds.

1. I'll just have half a glass. _____
2. others workers get double the amount I get. _____
3. Both his books have to be returned to the library. _____
4. She call two students thrice a week. _____

Q-10. complete the similes with words given in the box. [cool , old , busy , innocent]

1. as _____ as a rock.
2. as _____ as a bee.
3. as _____ as a lamb.
4. as _____ as a cucumber.

Q-11. fill in the blanks with Reflective pronouns.

1. I talk to _____ when I am nervous or excited. (yourself / myself / itself)
2. He fixed his car all by _____ (himself / itself / ourselves)
3. you all help _____ to more ice-cream. (myself / yourselves / himself)
4. we enjoyed _____ at the party. (herself / ourselves / yourself)



Q-12. put the adjective given in the brackets at the correct places and rewrite the sentences.


1. Tamanna is the girl in my class. (new) _____
2. My grandfather has beard. (white , long) _____
3. The green box is on the table. (wooden) _____
4. We should not use bottles. (plastic , old) _____

Q-13. (i) write antonym of the given words.

1. open _____
2. pursue _____

(ii) write synonym of the given words.

1. establish _____
2. decide _____



**Q - 1. Tick the correct option.**

- who was first person to hoist the Indian national Flag on foreign soil ?
a) pt Jawaharlal Nehru b) Bhikaiji Rustom Cama c) Pingali Venkavva d) Shaheed Bhagat Singh
- When the National flag is flown with the flag of foreign countries the flags of foreign countries shall proceed from the National Flag in _____.
a) Alphabetical order b) numerical order c) colour code d) any order
- when the length of the National flag is 63cm, its breadth is _____.
a) 63cm b) 36cm c) 42cm d) 24cm
- The National Flag should be flown on the official residence(s) of the _____.
a) president b) Vice president c) prime minister d) all of these
- This is a saline soda lake located in Buldhana district Maharashtra. It was created by a meteor impact
a) Lonar Lake b) Powali Lack c) Gorewada Lake d) Venna Lake
- which of the following is the largest river is land in the world situated in the midstream of river Brahmaputra in Assam ?
a) Majuli b) Bhavani c) Dibru saikhowa d) Srinagar
- This is a waterfall located in the East Khasi Hills near Cherrapunji, Meghalaya.
a) Meenmuttery Falls b) Dudhsagar Falls c) Nohkalikai falls d) Langshiang Falls
- who was the first person to go into space and move around the world ?
a) Jason Lewis b) Yuri Gagarin c) Loren acton d) kames Adamson
- which of the following is India's first cloned animal ?
a) Buffalo calf ' Garima ' b) Pashmina goat ' Noorie ' c) ' Polly ' the sheep d) buffalo ' Crib Gaurav '
- when was the first world Animal Day held ?
a) 7th September, 1901 b) 14th January, 2001 c) 4th October, 1931 d) 24th March, 1924
- . Name the first chimpanzee who was sent into space in the year 1961.
a) Ham b) Laika c) Elsa d) Jim
- _____ is the first Village to achieve 100% literacy .
a) koolimadu village b) pothanikkad village, kerala
c) Chappar village, Haryana d) khonama village, Nagaland
- gariphema, India's first Tobacco-free village is located in _____.
a) Kerala b) Nagaland c) Sikkim d) Uttar Pradesh
- Name the first female amputee to conquer mount Everest .
a) Bachendri Pal b) Junko Tabei c) Anamika Sinha d) Arunima Sinha
- The only blind person to climb mount Everest till date is...
a) Erik weihenmayer b) Jean-marc boivin c) Malavath purna d) yuichiro miura
- which of the following states is famous for parasailing ?
a) Delhi b) Goa c) Ladakh d) Andaman
- Riashkesh , in Uttarakhand is famous for...
a) River rafting b) Trekking c) Kayaking d) parasailing
- Mountain biking is popular in...
a) Jammu and Kashmir b) West Bengal c) Sikkim d) All of these
- ' Hola ' is Hello in..
a) Nepalese b) Spanish c) Chinese d) French
- ' Bom Dia ' in Paruguese means..
a) Hello b) Thank You c) Good morning d) Good Bye
- ' Good Night ' in Italian is ..
a) Buonanotte b) Ciao c) Nihao d) grazie
- An Indian music composer and lyricist who was visually impaired since birth.
a) Girish Sharma b) Shekhar Naik c) Ravindra jain d) H Ramakrishnan



23. He is the first Indian to skydive..

- a) Akbar khan b) Sai prasad Vishwanathan c) H Boniface prabhu d) Satendra singh

24. he is a polio disable person who pioneered stem cell transplantation in India .

- a) Suresh Advani b) Javed Abidi c) Satendra Singh d) H Ramakrishnan

25. one of the most striking features of this train is that the trip begins or ends either in _____ or _____.

- a) Delhi, Kolkata b) Delhi, Chennai c) Chennai, Mumbai d) Delhi, Mumbai

26. This Luxury train has two dining coaches named _____ mahal and _____ mahal.

- a) Rang, Rangeela b) Rang, Mayur c) Rang, Ratna d) Rang, Mayur

27. where is the most famous section of the great wall of China located ?

- a) Ming b) Badaling c) Juyong d) Gunsu

28. One third of the great wall of China has disappeared due to

- a) Desertification b) Strom c) heavy rains d) All of these

29. The ancient capital city of Roman Empire, also known as constantinople is ..

- a) Damascus b) Istanbul c) Aleppo d) Athens

30. This is the capital city of Italy that contains another city, vacation in its interior.

- a) Luoyang b) Jericho c) Rome d) Istanbul

Q-2. Match the following.

- | | |
|-----------------------|--|
| 1. French fries | a) improves balance and increase concentration |
| 2. pt. Brijju Maharaj | b) an unhealthy food |
| 3. Vienna | c) one of the best luxury trains in the world |
| 4. Trikonasana | d) solang valley |
| 5. palace on wheel's | e) Kathak dancer |
| 6. Third man | f) Imperial city of Austria |
| 7. malavath purna | g) Ni hao |
| 8. Paragliding | h) treats hair loss |
| 9. Hello | i) a position in a cricket field |
| 10. Bhringraj oil | j) Youngest girl to climb mount Everest |

Q-3. Answer the following questions

- Name one of the cleanest railway stations of India _____
- Write the German word which means 'thank you ' _____

Q-4. identify the following Pictures and write their names in the blanks provided.

1.



2.



3.




4.



5.



6.



7.



8.





પ્રશ્ન-1. નીચેના પ્રશ્નોના ઉત્તર એક-એક વાક્યમાં લખો.

1. રેલ્વે સ્ટેશનમાં ક્યા ક્યા સ્ટોલ છે ? _____
2. બાજુમાં પડેલી મૂર્તિને શું નુકસાન થયું હતું ? _____
3. બાળપણમાં રવિશંકર મહારાજનો સ્વભાવ કેવો હતો ? _____
4. સીમ કોને સાદ કરે છે ? _____
5. કહળસંગને કોણે ઠપકો આપ્યો ? _____
6. કવિ સૌને શું આપવા કહે છે ? _____
7. બાદશાહને પોતાનો દહાડો બગડશે એવું કેમ લાગ્યું ? _____
8. રસ્તે ચાલતા વચ્ચે શું આવે છે ? _____
9. યુવકે દુકાનદારને શાની ના પાડી ? _____
10. કવિ વંદન સ્વીકારવાનું કોને કહે છે ? _____

પ્રશ્ન-2. નીચેના પ્રશ્નોના ઉત્તર બે - ત્રણ વાક્યોમાં લખો.

1. ભારતમાતાનાં સંતાનો છેલ્લે શું પ્રાર્થના કરે છે ? _____
2. દુકાનદારને કેમ નવાઈ લાગી ? _____
3. મલકને આબાદ કરવા કવિ શું સૂચવે છે ? _____

પ્રશ્ન-3. ઉદાહરણ મુજબ શબ્દ બનાવો. { ઉદા- રેલ્વે - રેલ્વેસ્ટેશન }

1. બસ - _____
2. રીક્ષા - _____
3. વિમાન - _____
4. હેલીકોપ્ટર - _____

પ્રશ્ન-4. નીચેના સમાનાર્થી શબ્દ લખો.

1. અજવાળું - _____
2. પંથ - _____
3. સરળ - _____
4. અચાનક - _____
5. નિર્ભય - _____

પ્રશ્ન-5. નીચેના શબ્દોના વિરુદ્ધાર્થી શબ્દો લખો.

1. જ્ઞાની x _____
2. નીરોગી x _____
3. તવંગર x _____
4. સમાન x _____
5. સાક્ષરતા x _____

પ્રશ્ન-6. નીચેની પરિસ્થિતિમાં તમે શું કરશો ? વિચારો અને લખો.

1. તમે રસ્તા પર જતા હોવ અને અકસ્માત થયેલો જુઓ તો _____
2. રમતા રમતા તમારા મિત્રને ઈજા થાય તો _____
3. તમારી સ્કુલમાં ક્લાસની અંદર કચરો પડેલ હોય તો _____
4. તમારી નજર સામે ક્યાય અચાનક લાગે તો _____

પ્રશ્ન-7. ઉદાહરણ મુજબ શબ્દપ્રયોગ કરી નીચેની ખાલી જગ્યા પૂરો. { ઉજળું દૂધ જેવું }

1. કાળું _____ જેવું
2. મીઠું _____ જેવું
3. કડવું _____ જેવું
4. કુણું _____ જેવું

પ્રશ્ન-8. નીચેના શબ્દસમૂહ માટે એક શબ્દ લખો.

1. મૃત્યુ સમયે લખાતો પત્ર - _____
2. માટીની ભીંતનું નાનું ઘર - _____
3. પાઘડીના જેવો વિસ્તાર - _____
4. સવારનો નાસ્તો - _____
5. કાળના જેવા મોં વાળું - _____



खण्ड - क

प्रश्न-1. दिए गए गद्यांश को पढ़िए तथा निचे लिखे प्रश्नों के उत्तर दीजिए.

अदिति बालकनी में टल रही थी, जहाँ उसकी माँ के प्रिय गमले रखे थे। उसने रेलिंग पर कोहनिया टीकाकार उस विशेष पेड़ को निहारा जिसने उसे विश्वास दिलाया था, की उसे यह नया मकान बहुत पसंद आएगा। यह एक "आल्मंड ट्री" यानी बादाम का पेड़ था। यह पेड़ हरा-भरा सुन्दर और दूसरी मंजिल तक ऊँचा था। ऐसा, पेड़ जिसे देखते ही गहरी साँस लेनी पड़े। ऐसा पेड़ जो दोपहर में हरी, चमकीली रोशनी से पुरे घर को भर देता था। अदिति की माँ अपने दिन भर के काम से दस मिनट निकलकर अपने पौधों को पानी देती और पानी देते हुए हर पौधे को हल्का सा छू देती या देख भर लेती। बचपन से ही अदिति माँ को ऐसा करते देखती थी और इसलिए वह भी पौधों को अच्छी तरह समझती थी। वह बादाम का पेड़ स्वस्थ व मजबूत था। और अनेक प्राणियों का आश्रय था। इसके पत्ते टेबल - टेनिस के बल्लों जैसे बड़े और चमकीले थे जिनमे से कुछ सरदी का मौसम आने पर लाल हो जाते थे।

1. सही उत्तर पर निशान लगाइए :

- क) अदिति कहा टहल रही थी ? a) पार्क में b) छत पर c) बालकनी में
ख) अदिति की माँ दिनभर काम से कितने मिनट निकालकर पौधों को पानी देती थी ?
a) पाँच मिनट b) दस मिनट c) बीस मिनट

2. दिए गए शब्दोंके विलोम शब्द लिखिए :

- क) नीचा = _____ ख) नापसंद = _____

3. प्रश्नों के उत्तर लिखिए :

- क) बचपन से ही अदिति माँ को क्या करते देखती थी ? _____
ख) बादाम का पेड़ कैसा था ? _____

प्रश्न-2. पर्यायवाची शब्द . (दो दो लिखिए)

1. धरा _____ 2. सबेरा _____
3. नभ _____ 4. पवन _____

प्रश्न-3. अनेक शब्दों के लिए एक शब्द लिखिए :

1. सात दिनों का समूह - _____ 2. जो देखने योग्य हो - _____
3. जिसमे साहस हो - _____

प्रश्न-4. मुहावरों के अर्थ लिखकर वाक्य बनाइए :

1. चहेरा पीला पड़ना - _____
2. आग बबूला होना - _____

प्रश्न-5. विलोम शब्द

1. स्वच्छ _____ 2. आदर _____ 3. जीवन _____

प्रश्न-6. दिए गए वाक्यों में रेखांकित सर्वनाम शब्दों के उचित भेद पर निशान लगाइए :

- क) जब हम जपान की धरती पर पहुँच गए। a) पुरुषवाचक सर्वनाम b) अनिश्चयवाचक सर्वनाम
ख) इस की ऊँचाई 333 मीटर है। a) निश्चयवाचक सर्वनाम b) अनिश्चयवाचक सर्वनाम
ग) मेरे पिताजी ने पूछा, " वहाँ कौन है ?" a) निजवाचक सर्वनाम b) प्रश्नवाचक सर्वनाम

प्रश्न-7. दिए गए शब्दों के तद्धृत रूप लिखिए :

- तत्सम तद्धृत तत्सम तद्धृत
1. अग्नि _____ 2. ग्राम _____
3. रात्री _____

**Q - 1. Tick the correct option.**

- | | | | | |
|--|---------------------|----------------------|----------------------|-----------------------|
| 1. The successor of 1, 99, 999 is | a) 2 million | b) 10 million | c) 20 Lakh | d) 2 Lakh |
| 2. Estimate the sum of $277 + 317$ to the nearest hundred . | a) 700 | b) 600 | c) 800 | d) 500 |
| 3. $48 + 56 = \underline{\hspace{2cm}} + 48$ | a) 56 | b) 48 | c) 0 | d) 104 |
| 4. $73 + 1086 + 27 = 1086 + \underline{\hspace{2cm}}$ | a) 27 | b) 100 | c) 1000 | d) 10 |
| 5. which of the following is a prime number ? | a) 1 | b) 61 | c) 81 | d) 91 |
| 6. which of the following is a multiple of 4 ? | a) 32426 | b) 90046 | c) 12348 | d) 40482 |
| 7. The HCF of 12, 18 is | a) 12 | b) 18 | c) 6 | d) 3 |
| 8. The value of $(-16) - (12)$ is | a) 32 | b) 4 | c) 28 | d) -28 |
| 9. The biggest among $\frac{1}{4}, \frac{3}{5}, \frac{7}{10}$ and $\frac{1}{2}$ is | a) $\frac{1}{2}$ | b) $\frac{3}{5}$ | c) $\frac{7}{10}$ | d) $\frac{1}{4}$ |
| 10. The fraction equivalent to 3.04 is | a) $\frac{304}{10}$ | b) $\frac{304}{100}$ | c) $\frac{340}{100}$ | d) $\frac{304}{1000}$ |

Q - 2. fill in the blanks.

- 1 crore = _____ million
- when 8,947 is rounded off to the nearest tens, we get _____.
- $77 + 998 = 998 + \underline{\hspace{2cm}}$
- $\underline{\hspace{2cm}} \div 972 = 1$
- A number for which the sum of all its factors is equal to twice the number is called a _____.
- The HCF of two consecutive odd numbers is _____.
- The LCM of 9, 12 is _____.
- $15 - (-3) = \underline{\hspace{2cm}}$.
- $\frac{4}{7} + \frac{2}{3} = \underline{\hspace{2cm}}$
- $2 - 0.43 = \underline{\hspace{2cm}}$.

Q - 3. Insert commas according to the Indian system of Numeration and write their number names.

- a) 13546712 :- _____

Q - 4. write the expanded form of the following numbers.

- a) 2, 60, 15, 347 :- _____

Q - 5. Insert commas and write the number names according to the International system of Numeration.

- b) 10023734 : _____

Q - 6. write the Roman numerals for the following.

- a) 283 :- _____

Q - 7. write the properties used in the following.

- a) $175 + 32 = 32 + 175$ b) $189 + (53 + 11) = 189 + (11 + 53) = (189 + 11) + 53$

Q - 8. Evaluable of the following using distributive property of whole numbers.

- a) 12×95 b) 248×101

Q - 9. Evaluate the following.

- a) $672 + 99$ b) $9898 - 999$

Q - 10. write the successor and predecessor of each of the following.

- a) 235324 b) 111



Q - 1. complete the following.

1. गुरु ब्रह्मा _____ तस्मै श्री गुरुवे नमः

Q - 2. write the meaning in English of these word.

1. वानरः _____ 2. वृक्षः _____ 3. सिंहः _____ 4. भती : _____ 5. नेत्रम _____
6. पादाः _____ 7. सोमवासरः _____ 8. लिखतु _____ 9. पिबति _____ 10. वदति _____

Q - 3. write the words in Sanskrit.

1. Fox _____ 2. Runs _____ 3. Tail _____
4. Trunk _____ 5. Plays _____

Q - 4. answer the following questions.

1. शशकः कुत्र निवसति ? _____
2. किम पतति ? _____
3. सिंह किम वदति ? _____
4. अध कः वासर ? _____
5. वट वृक्ष कुत्र अस्ति ? _____
6. सुवर्णहारः कुत्र अस्ति ? _____
7. सर्प कुत्र वसति ? _____
8. काक : सुवर्णहारः कुत्र क्षिपति ? _____
9. कः शावकः खादति ? _____
10. कः सर्प मारयति ? _____

Q - 5. Draw the watch of this time

1. पञ्चवादनम 2. अष्टवादनम 3. त्रिवादनम 4. सप्तवादन

Q - 6. watch the pictures and write its name in Sanskrit and English.

1




2



3



4



5



**Q - 1. Tick the correct option.**

1. which one of the following is not prepared from milk ? a) butter b) cheese c) oil
2. The _____ is an edible part of potato plant a) leaf b) root c) stem
3. we can sprout seed in _____. a) rocks b) water c) oil
4. which one is a source of fat ? a) soya bean oil b) apple c) wheat
5. Obesity is due to excessive intake of _____. a) protein b) fats c) minerals
6. Spongy and bleeding gums are symptoms of _____. a) beriberi b) scurvy c) rickets
7. Roller gin is used for _____. a) weaving b) spinning c) ginning
8. which one is a mixed fiber ? a) terry cot b) cotton c) silk
9. Grounded glass is a/an _____ material. a) soft b) opaque c) Translucent
10. which of the following is soluble in water ? a) sand b) plastic c) common salt
11. which of the following is insoluble in water ? a) glycerin b) vinegar c) kerosene
12. During filtration what do we obtain on the filter paper ? a) residue b) decant c) filtrate
13. After harvesting food grains are separated by _____. a) threshing b) Hand-picking c) winnowing
14. burning of coal is a/an _____ change. a) reversible b) irreversible c) natural
15. Formation of Glacier is an example of _____.
a) human made change b) natural change c) human made and reversible change
16. Female reproductive part of a flower is called _____. a) stamen b) pistil c) pollen
17. Male reproductive part of a flower as called _____. a) stamen b) filament c) carpel
18. which of the following has a liquid skeleton ? a) fish b) snake c) earthworm
19. which of the following help a bird to fly ? a) streamlined body b) hollow bones c) all of these
20. The joint in our elbow is an example of _____ joint a) pivot b) hinge c) gliding

Q - 2. Fill in the blanks.

1. we get sugar from _____.
2. Honeybees store honey in their _____.
3. Bacteria and Fungi are called _____.
4. _____ and fats provide us energy.
5. carrot is a rich source of vitamin _____.
6. Deficiency of vitamin D causes a disease known as _____.
7. silk is a/an _____ fiber.
8. cotton is a _____ fiber.
9. _____ have luster.
10. Iron is a _____ metal.
11. Vinegar is _____ in water.
12. Solubility of salt in water _____ on heating the solution.
13. Grains and husk can be separated by using _____.
14. Freezing of water is an example of _____ change.
15. Beating heating is an example _____ change.
16. Stretching of spring is a _____ change.
17. The fusion of male and female sex cells is called _____.
18. Bleaching removes _____ from the leaf.
19. _____ prepare food, they are called the food factories or kitchen of the plant.
20. _____ protects heart and lungs.

Q - 3. Match the following.**A**

1. Ginning
2. Plant fiber
3. Weaving
4. Animal fiber
5. spinning

B

- a) silk
- b) converting yarn to cloth
- c) making yarn from fibers
- d) separation of cotton fibers from seeds
- e) cotton

**Q - 1. Tick the correct option.**

1. Which script is mainly found on "Tad Patras and Bhojapatras" ? a) Avadhi b) Bhojpuri c) Pandu
2. Which colour is used to show plains in a colour. a) Yellow b) Red c) Blue
3. Which is the first social institution coming in our contact ? a) School b) Neighborhood c) Family
4. Which is the most revolutionary invention of human life ? a) Fire b) Wheel c) Farming
5. Into how many Zones is the earth divided ? a) Four b) Two c) Three
6. What was the only reason of wandering for the primitive man ? a) heat and cold b) need of food c) rain
7. In which direction in India is Gujarat situated ? a) south b) West c) North
8. What is the rank of Gujarat in area among the states of India ? a) seventh b) ninth c) Eight
9. In which river valley the Harappa and Mohenjo-Daro towns were extended ?
a) Indus (Sindhu) b) Ganges c) Narmada
10. Which town planning was ideal among the towns found from Harappa civilization ?
a) Lothal b) Mohenjo-Daro c) Harappa

Q - 2. Answer in a one word.

1. Which art was fully developed in Mohenjo-Daro and Harappa - towns ? _____
2. Which is the main characteristic of Indian (civilization) ? _____
3. Which types of boundaries does Gujarat have ? _____
4. What were the main activities of people of Joma's village ? _____
5. Which horizontal line divides the globe into two equal parts ? _____
6. From which materials did the primitive man make his tools ? _____
7. By committing which type of crime does an Indian citizen lose his citizenship ? _____
8. Give the full form of "NATMO" _____
9. What is an "Inscription" ? _____
10. What is "Tamrapatra" ? _____

Q - 3. Fill in the blanks.

1. Gujarat is situated in _____ direction of India.
2. The _____ of our country indicates the unity in diversity.
3. _____ and _____ were large towns of Indus valley civilization.
4. The water area on the earth is called _____.
5. A _____ is a drawing of any part of the surface of the earth on a plain paper.


Q - 4. Match the following.**A**

1. Sunrise
2. The smallest unit of society.
3. Equator
4. New stone age
5. plain of the map

B

- a) Farmers stages
- b) Horizontal line passing from the middle of the earth.
- c) Yellow Colour
- d) Eastern direction
- e) Family

Q - 5. Write 'T' for true and 'F' for false statements.

1. The National Archives is situated in Delhi.
2. Conventional signs are a part of map.
3.  is Conventional sign for a river.
4. All people living in India are Indian citizens.
5. New stone age is considered to be farmers stage.
6. We get culture from the family.
7. minimum light falls over temperate Zone on the earth.
8. people of Mehargadh reared animals.
9. In India, Gujarat has the Shortest Sea boundary.
10. The Land area of Gujarat is divided into Three Zones.